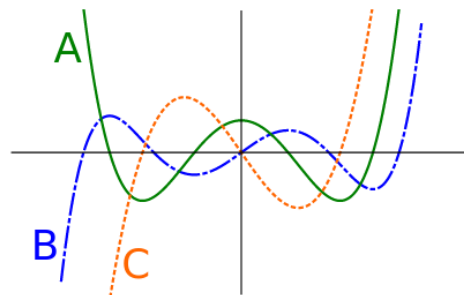
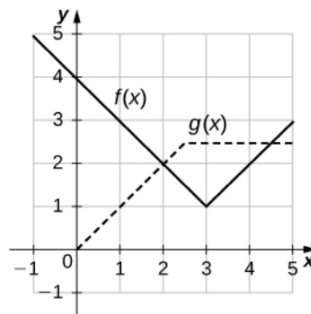

IN-CLASS ACTIVITY : DERIVATIVES IV

1. Drawn here is the graph of a function f along with the graphs of its first derivative f' and second derivative f'' . Which graph is which?



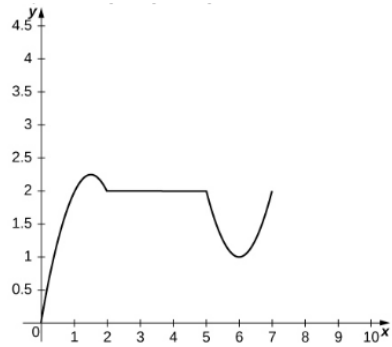
2. Below are the graphs of the functions $f(x)$ and $g(x)$.



Let $h(x) = f(x) + g(x)$. Find $h'(1)$, $h'(3)$ and $h'(4)$, if they exist. Write then an explicit formula for $f(x)$, $g(x)$ and their derivatives.

3. Find the equation of the tangent line to the graph of $f(x) = x^2 + \frac{4}{x} - 10$ at $x = 8$.
4. A potato is launched vertically upward with an initial velocity of 100ft/s from a potato gun at the top of a 85-foot-tall building. The distance in feet that the potato travels from the ground after t seconds is given by $s(t) = -16t^2 + 100t + 85$.
- Find the velocity of the potato after 0.5s.
 - Determine when the potato reaches its maximum height.
 - Find the acceleration of the potato at 1.5s.
 - Determine how long the potato is in the air.
 - Determine the velocity of the potato when it hits the ground.

5. The following graph shows the position $s(t)$ of an object moving along a straight line.



- i) Determine the time intervals when the velocity is positive, negative, or zero.
- ii) Sketch the graph of the velocity function.